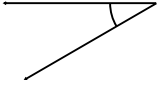


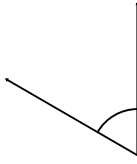
A. Aşağıdaki açıları isimlendirerek, açıölçerle ölçüp sonuçlarını altlarına yazın.

1.



.....

2.



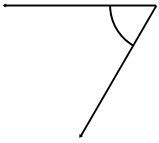
.....

3.



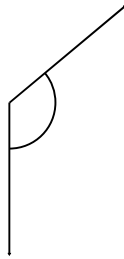
.....

4.



.....

5.



.....

6.



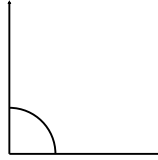
.....

7.



.....

8.



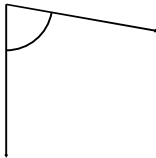
.....

9.



.....

10.



.....

11.



.....

12.



.....

- | | | | | | | | |
|---------|--------|---------|--------|--------|--------|---------|---------|
| A. 30° | B. 30° | C. 20° | D. 90° | E. 60° | F. 80° | G. 170° | H. 130° |
| I. 150° | J. 10° | K. 110° | L. 60° | | | | |